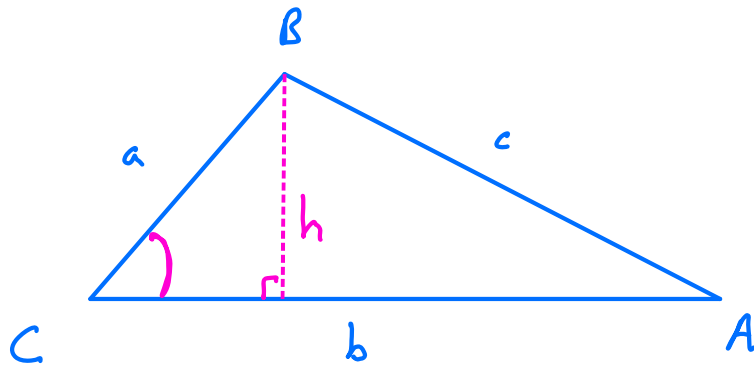


Area of a Triangle by Trigonometry



$$\text{Area} = \frac{1}{2} \text{ base} \times \text{height}$$

$$\text{Area} = \frac{1}{2} bh \quad *$$

$$\sin C = \frac{\text{opp}}{\text{hyp}} = \frac{h}{a}$$

$$\Rightarrow a \sin C = h$$

Sub for h in *

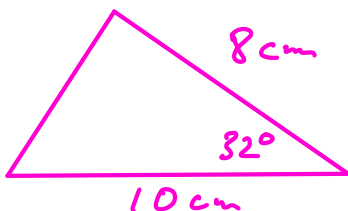
$$\text{Area} = \frac{1}{2} ab \sin C$$

$$\text{or } \frac{1}{2} bc \sin A \quad \text{or } \frac{1}{2} ac \sin B$$

Basically the formula for the area of any triangle is $\frac{1}{2} \times \text{any side} \times \text{any other side} \times \text{the sine of the angle between those two sides}$

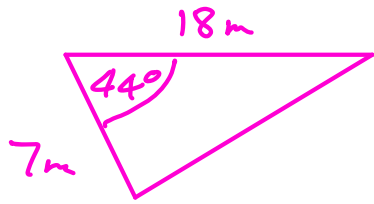
Examples

1)



$$\begin{aligned} \text{Area} &= \frac{1}{2} \times 8 \times 10 \times \sin 32^\circ \\ &= 21.2 \text{ cm}^2 \end{aligned}$$

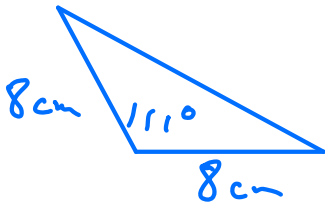
2)



$$\begin{aligned} \text{Area} &= \frac{1}{2} \times 7 \times 18 \times \sin 44^\circ \\ &= 43.8 \text{ cm}^2 \end{aligned}$$

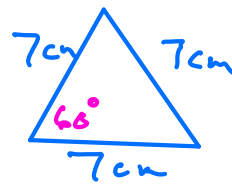
Exercise Find Area

1)



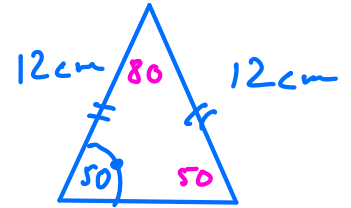
$$\begin{aligned} A &= \frac{1}{2} \times 8 \times 8 \times \sin 111^\circ \\ &= 29.9 \text{ cm} \end{aligned}$$

2)



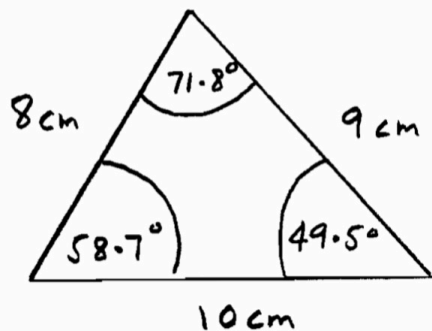
$$\begin{aligned} A &= \frac{1}{2} \times 7 \times 7 \times \sin 60^\circ \\ &= 21.2 \text{ cm}^2 \end{aligned}$$

3)



$$\begin{aligned} A &= \frac{1}{2} \times 12 \times 12 \times \sin 80^\circ \\ &= 70.9 \text{ cm}^2 \end{aligned}$$

4)



Find area of triangle
3 different ways.

$$A = \frac{1}{2} \times 8 \times 10 \times \sin 58.7^\circ = 34.2 \text{ cm}^2$$

$$A = \frac{1}{2} \times 8 \times 9 \times \sin 71.8^\circ = 34.2 \text{ cm}^2$$

$$A = \frac{1}{2} \times 10 \times 9 \times \sin 49.5^\circ = 34.2 \text{ cm}^2$$