

Write your name here

Surname

Other names

Pearson Edexcel
Level 1/Level 2 GCSE (9 - 1)

Centre Number

--	--	--	--	--	--

Candidate Number

--	--	--	--	--

Mathematics

Paper 3 (Calculator)

Higher Tier

Mock Set 3 – Autumn 2017

Time: 1 hour 30 minutes

Paper Reference

1MA1/3H

You must have: Ruler graduated in centimetres and millimetres, protractor, pair of compasses, pen, HB pencil, eraser, calculator. Tracing paper may be used.

Total Marks



Instructions

- Use **black** ink or ball-point pen.
- **Fill in the boxes** at the top of this page with your name, centre number and candidate number.
- Answer **all** questions.
- Answer the questions in the spaces provided – *there may be more space than you need.*
- You must **show all your working**.
- Diagrams are **NOT** accurately drawn, unless otherwise indicated.
- **Calculators may be used.**
- If your calculator does not have a π button, take the value of π to be 3.142 unless the question instructs otherwise.

Information

- The total mark for this paper is 80
- The marks for **each** question are shown in brackets – *use this as a guide as to how much time to spend on each question.*

Advice

- Read each question carefully before you start to answer it.
- Keep an eye on the time.
- Try to answer every question.
- Check your answers if you have time at the end.

Turn over ►

S57496A

©2017 Pearson Education Ltd.

6/7/2/2/4/



Pearson

Answer ALL questions.

Write your answers in the spaces provided.

You must write down all the stages in your working.

- 1** (a) Write 168 as a product of its prime factors.
You must show your working.

.....
(3)

- (b) Find the highest common factor (HCF) of 168 and 180

.....
(2)

(Total for Question 1 is 5 marks)

DO NOT WRITE IN THIS AREA

DO NOT WRITE IN THIS AREA

DO NOT WRITE IN THIS AREA

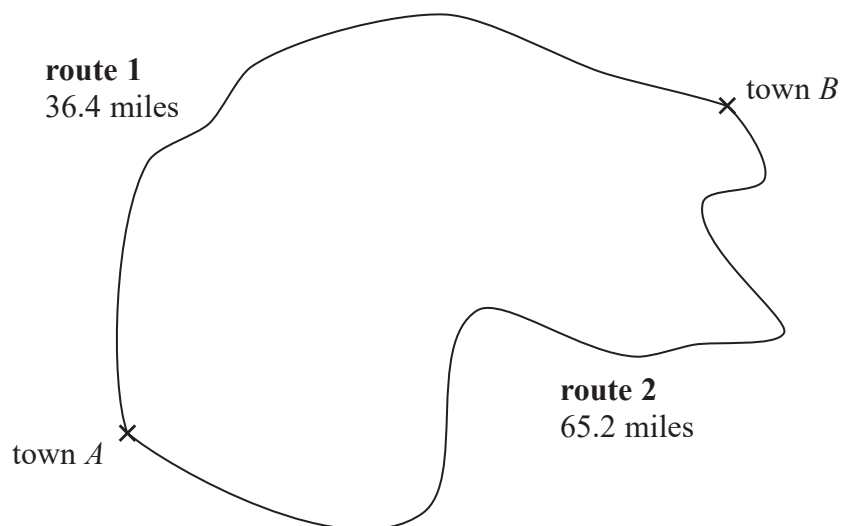


DO NOT WRITE IN THIS AREA

DO NOT WRITE IN THIS AREA

DO NOT WRITE IN THIS AREA

2 Eric and Geraldine both drove from town *A* to town *B*.



Both Eric and Geraldine left town *A* at 2 pm.

Eric drove on route 1
He got to town *B* at 2 48 pm.


Geraldine drove on route 2
She got to town *B* at 3 25 pm.

Who drove at the greater average speed?
You must show all your working.

(Total for Question 2 is 3 marks)



3 Here is an accurate scale drawing of a school playground.



1 cm represents 2 m

Nasim is going to put a seat in the playground.

The seat has to be

- less than 9 m from C
- closer to BC than to AB
- more than 4 m from AB

Show, by shading on the diagram, the region where Nasim can put the seat.

(Total for Question 3 is 4 marks)



DO NOT WRITE IN THIS AREA

DO NOT WRITE IN THIS AREA

DO NOT WRITE IN THIS AREA

4 There are only red counters, blue counters and green counters in a bag.

number of red counters : number of blue counters : number of green counters = 1 : 3 : 7

A counter is going to be taken at random from the bag.

(a) Complete the table below to show each of the probabilities that the counter will be red or blue or green.

Colour	red	blue	green
Probability			

(2)

Jamie takes at random a counter from the bag and records the colour of the counter. He then puts the counter back in the bag.

Jamie does this a number of times. He records a total of 68 blue counters.

(b) Work out an estimate for the total number of times Jamie takes a counter from the bag.

.....
(2)

(Total for Question 4 is 4 marks)



- 5 Maryam is trying to expand and simplify $(n - 2)^2$
Here is her working.

$$\begin{aligned}(n - 2)^2 &= (n - 2)(n - 2) \\ &= n^2 - 2n - 2n - 4 \\ &= n^2 - 4n - 4\end{aligned}$$

Maryam's answer is wrong.

- (a) Find Maryam's mistake.

(1)

Josh is trying to factorise $x^2 - 6x + 8$
His reasoning is,

$$\begin{aligned}\text{because } 4 \times 2 &= 8 \\ \text{and } 4 + 2 &= 6\end{aligned}$$

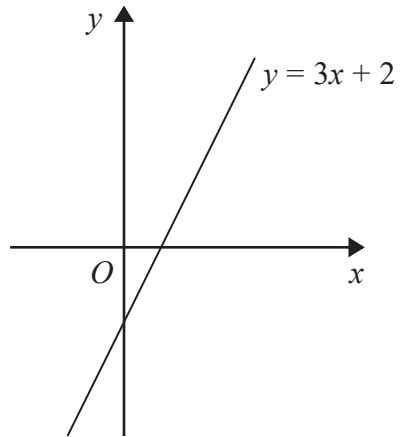
$$\text{then } x^2 - 6x + 8 = (x + 4)(x + 2)$$

- (b) Explain what is wrong with Josh's reasoning.

(1)



Shona has to draw the line with equation $y = 3x + 2$
Here is her line.



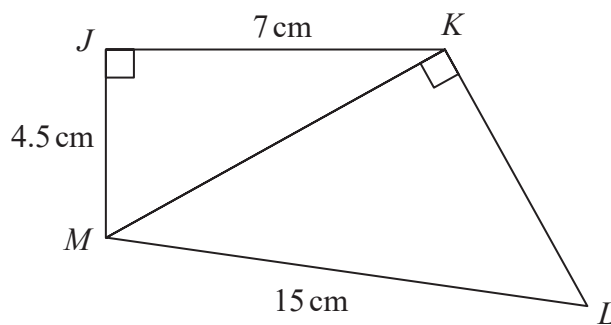
(c) Explain why Shona's line **cannot** be correct.

(1)

(Total for Question 5 is 3 marks)



6 The diagram shows a quadrilateral $JKLM$.



Work out the size of angle KLM .
Give your answer correct to 3 significant figures.

.....
(Total for Question 6 is 4 marks)

DO NOT WRITE IN THIS AREA

DO NOT WRITE IN THIS AREA

DO NOT WRITE IN THIS AREA



DO NOT WRITE IN THIS AREA

DO NOT WRITE IN THIS AREA

DO NOT WRITE IN THIS AREA

7 Liquid A has a density of 1.42 g/cm^3

7 cm^3 of liquid A is mixed with 125 cm^3 of liquid B to make liquid C.

Liquid C has a density of 1.05 g/cm^3

Find the density of liquid B.

Give your answer correct to 2 decimal places.

..... g/cm^3

(Total for Question 7 is 3 marks)

8 Kiera used her calculator to work out the value of a number x .

She wrote down the first two digits of the answer on her calculator.

She wrote down 7.3

Write down the error interval for x .

.....
(Total for Question 8 is 2 marks)



9 Francesco carried out a survey about the ages of the people in his office.

The table shows information about his results.

Age (a years)	Cumulative frequency
$20 < a \leq 30$	10
$20 < a \leq 40$	26
$20 < a \leq 50$	58
$20 < a \leq 60$	66
$20 < a \leq 70$	70

(a) On the grid opposite, draw a cumulative frequency graph for this information.

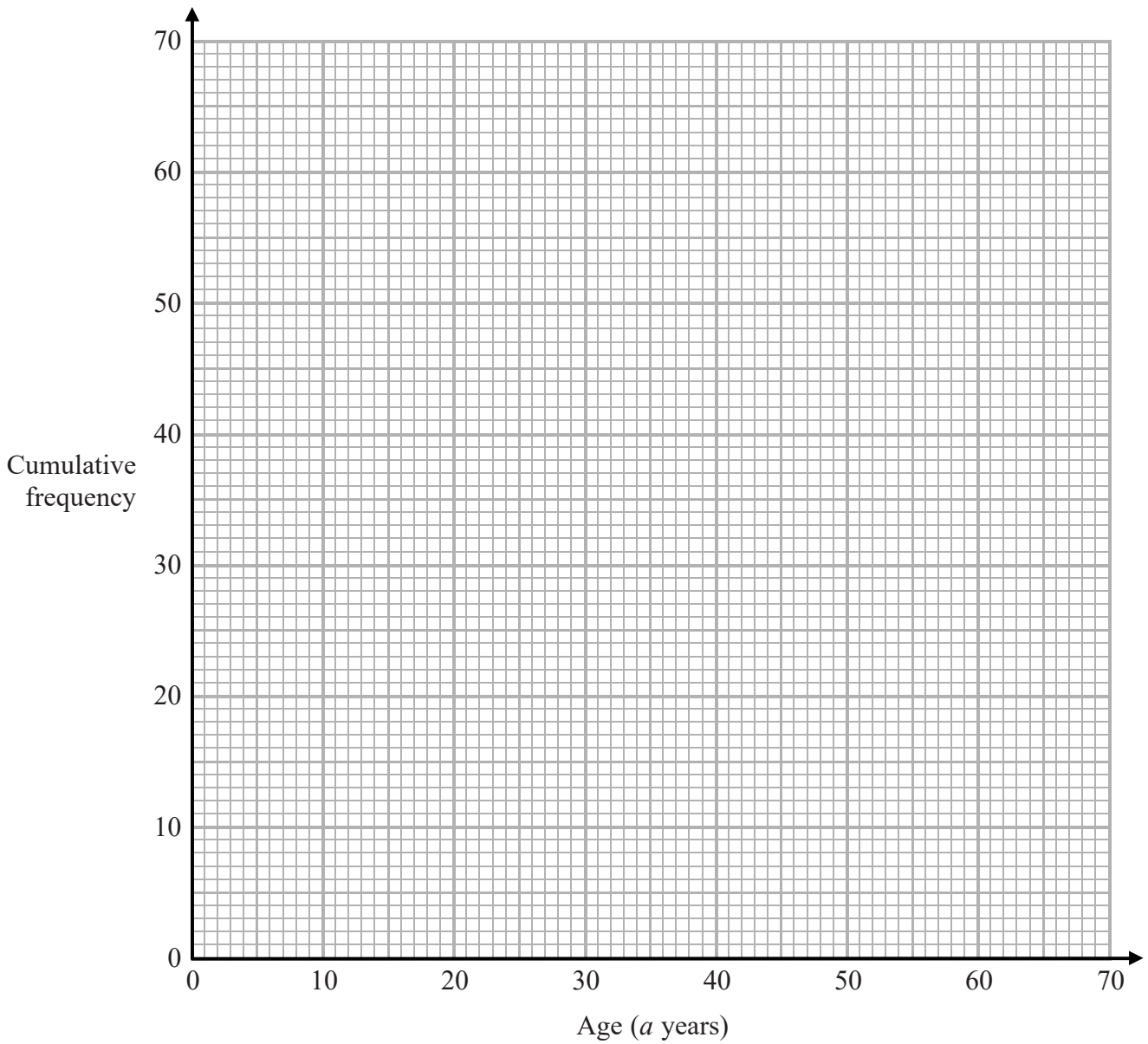
(2)



DO NOT WRITE IN THIS AREA

DO NOT WRITE IN THIS AREA

DO NOT WRITE IN THIS AREA



(b) Use your graph to find an estimate for the median age.

.....years

(1)

Francesco says,

“More than 60% of the people in the office are between 35 and 55 years old.”

(c) Use your graph to determine if Francesco is correct.

.....
(3)

(Total for Question 9 is 6 marks)



10 In a sale, the price of a TV is reduced by 25%

A week later, the sale price of the TV is reduced by 15%
The price of the TV is now £293.25

What was the price of the TV before the sale?

£.....

(Total for Question 10 is 3 marks)

11 Expand and simplify $(x + 2)(x + 8)(x - 4)$

.....
(Total for Question 11 is 3 marks)

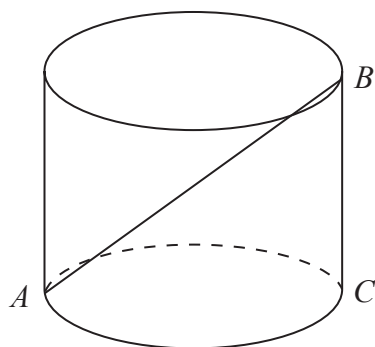


DO NOT WRITE IN THIS AREA

DO NOT WRITE IN THIS AREA

DO NOT WRITE IN THIS AREA

12 The diagram shows a metal rod, AB , resting inside a cylindrical tin.



The tin is on a horizontal table.
 AC is a diameter of the base of the tin.
 B is on the top edge of the tin.
 BC is vertical.

The radius of the base of the tin is 5 cm.
The volume of the tin is 1178 cm^3

Find the angle between the rod and the base of the tin.
Give your answer correct to the nearest degree.

.....
o

(Total for Question 12 is 4 marks)



13 For any three consecutive whole numbers, prove algebraically that

the largest number and the smallest number are factors of the number that is one less than the square of the middle number.

(Total for Question 13 is 3 marks)

14 Prove algebraically that the recurring decimal $0.4\dot{5}\dot{7}$ can be written as $\frac{151}{330}$

(Total for Question 14 is 3 marks)



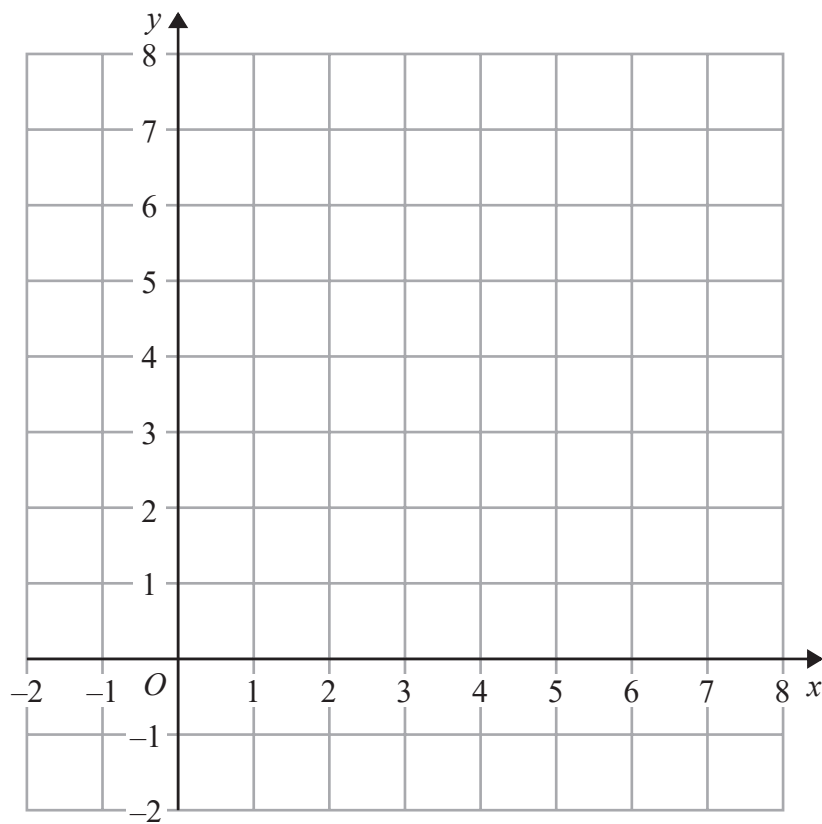
15 On the grid show, by shading, the region defined by the inequalities

$$x < 4$$

$$2x + y > 6$$

$$y > \frac{1}{3}x$$

Label the region **R**.



(Total for Question 15 is 3 marks)



16 There is a large number of cubes in a bag.
Jason wants to work out an estimate for the number of cubes in the bag.
He takes at random 10 cubes from the bag.
He puts a mark on each cube and then puts each cube back in the bag.
Jason shakes the bag and then takes at random 20 of the cubes.
There is a mark on 3 of the cubes.
Work out an estimate for the total number of cubes in the bag.

.....
(Total for Question 16 is 3 marks)

DO NOT WRITE IN THIS AREA

DO NOT WRITE IN THIS AREA

DO NOT WRITE IN THIS AREA



DO NOT WRITE IN THIS AREA

DO NOT WRITE IN THIS AREA

DO NOT WRITE IN THIS AREA

17 At the start of year n , the quantity of a radioactive metal is P_n
 At the start of the following year, the quantity of the same metal is given by

$$P_{n+1} = 0.87P_n$$

At the start of 2016 there were 30 grams of the metal.

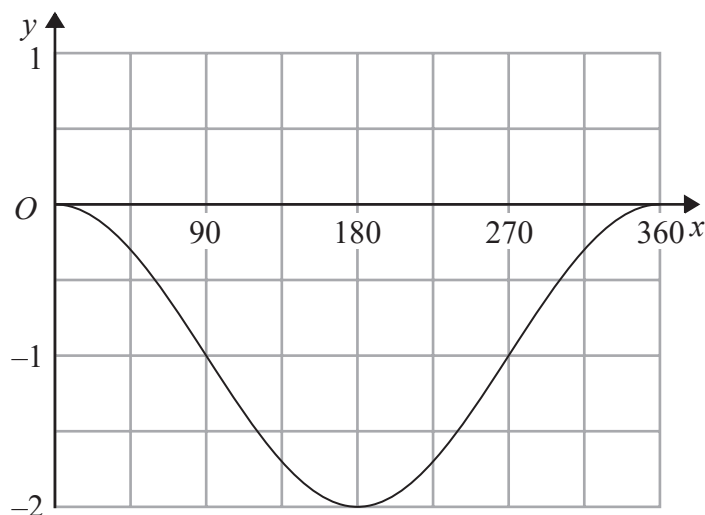
What will be the quantity of the metal at the start of 2019?

Give your answer to the nearest gram.

.....grams

(Total for Question 17 is 3 marks)

18 Here is a sketch of the curve $y = \sin(x + a)^\circ + b$



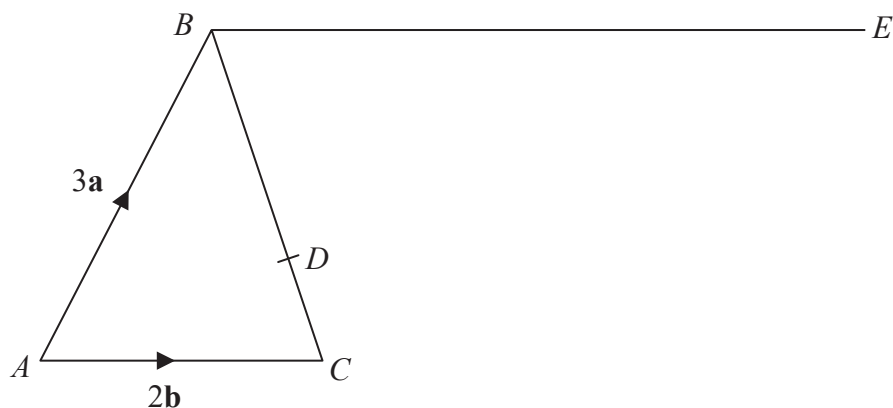
Given that $0 < a < 360$
 find the value of a and the value of b .

$a =$

$b =$

(Total for Question 18 is 2 marks)





The diagram shows triangle ABC .

$$\vec{AB} = 3\mathbf{a}$$

$$\vec{AC} = 2\mathbf{b}$$

$$\vec{BE} = 3\vec{AC}$$

D is the point on BC such that $BD:DC = 3:1$

Prove that ADE is a straight line.

(Total for Question 19 is 4 marks)



DO NOT WRITE IN THIS AREA

DO NOT WRITE IN THIS AREA

DO NOT WRITE IN THIS AREA

20 There are 9 counters in a bag.

There is an even number on 3 of the counters.

There is an odd number on 6 of the counters.

Three counters are going to be taken at random from the bag.

The numbers on the counters will be added together to give the total.

Find the probability that the total is an odd number.

.....
(Total for Question 20 is 5 marks)



- 21 $f(x) = x^3$
 $g(x) = 4x - 1$
(a) Find $fg(2)$

.....
(2)

$$h(x) = fg(x)$$

- (b) Find an expression for $h^{-1}(x)$

$$h^{-1}(x) = \text{.....}$$

(3)

(Total for Question 21 is 5 marks)

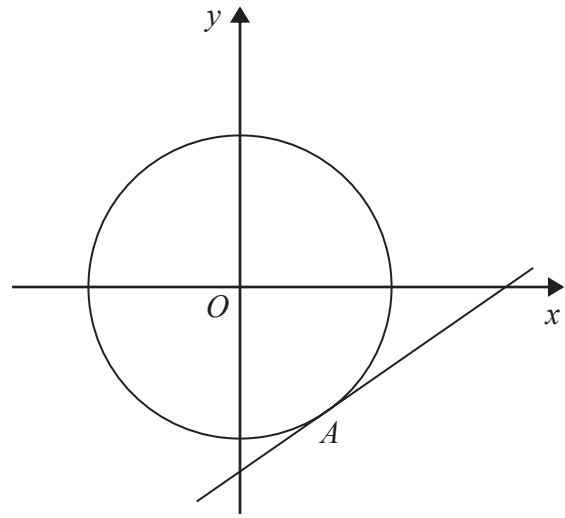


DO NOT WRITE IN THIS AREA

DO NOT WRITE IN THIS AREA

DO NOT WRITE IN THIS AREA

22 The diagram shows the circle with equation $x^2 + y^2 = 261$



A tangent to the circle is drawn at point A with coordinates $(p, -15)$, where $p > 0$

Find an equation of the tangent at A .

.....
(Total for Question 22 is 5 marks)

TOTAL FOR PAPER IS 80 MARKS



DO NOT WRITE IN THIS AREA

DO NOT WRITE IN THIS AREA

DO NOT WRITE IN THIS AREA

BLANK PAGE



DO NOT WRITE IN THIS AREA

DO NOT WRITE IN THIS AREA

DO NOT WRITE IN THIS AREA

BLANK PAGE



DO NOT WRITE IN THIS AREA

DO NOT WRITE IN THIS AREA

DO NOT WRITE IN THIS AREA

BLANK PAGE

